

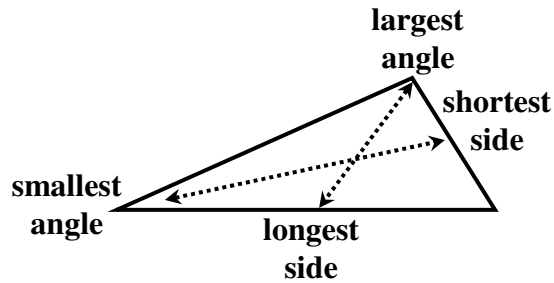
Section 6.1 – Inequalities in One Triangle

The side opposite of the largest angle is the \_\_\_\_\_ side.

The side opposite of the smallest angle is the \_\_\_\_\_ side.

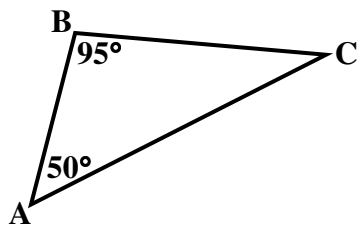
The angle opposite of the longest side is the \_\_\_\_\_ angle.

The angle opposite of the shortest side is the \_\_\_\_\_ angle.

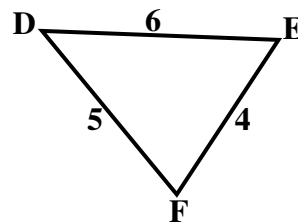


Ex 1:

a) List the sides in order from shortest to longest.



b) List the angles in order from smallest to largest.



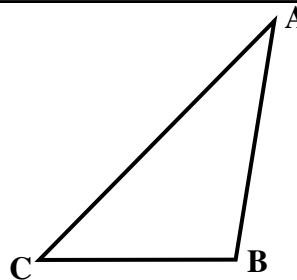
**Triangle Inequality Theorem**

The sum of the lengths of any two sides of a triangle is greater than the length of the third side.

$$AB + BC > AC$$

$$AC + BC > AB$$

$$AB + AC > BC$$



Ex 2:

Is it possible to construct a triangle with the given side lengths?

**Important Note:** You only have to use part of the Triangle Inequality Theorem to solve this type of problem. If the sum of the two shortest sides lengths is greater than the third, then a triangle can be constructed.

a) 8 in., 3 in., 3 in.

b) 6 in., 6 in., 12 in.

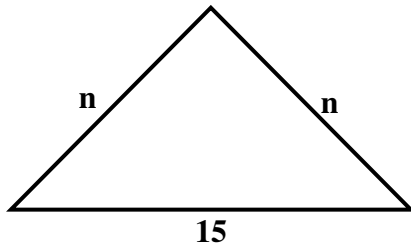
c) 9 in., 5 in., 11 in.

**Ex 3:**

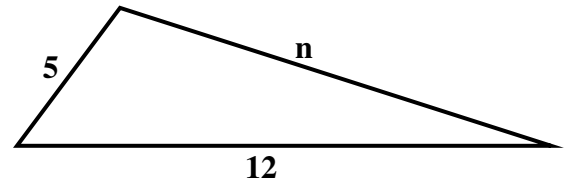
A triangle has one side of 3 centimeters and another of 14 centimeters. Describe the possible lengths of the third side.

**Ex 4:**

a) In the figure below,  $n$  is a whole number. What is the smallest possible value for  $n$ ?

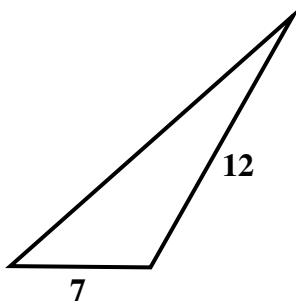


b) In the figure below,  $n$  is a whole number. What is the largest possible value for  $n$ ?



**Ex 5:**

a) The lengths of two sides of the triangle are known.



Which of the following could be the perimeter of the triangle?

- A 19
- B 24
- C 31
- D 38

b) Two sides of a triangle measure 14 and 9. Which of the following cannot be the perimeter of the triangle.

- A 28
- B 37
- C 41
- D 46